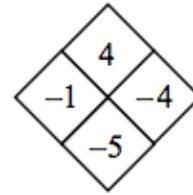
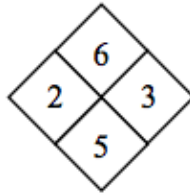
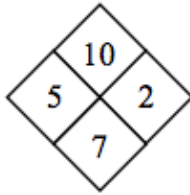


Name: _____

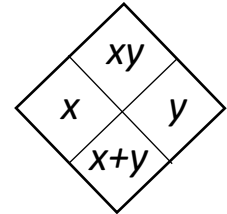
Period: _____

Algebra 2
Diamond Problem Intro

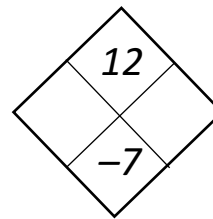
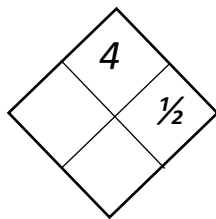
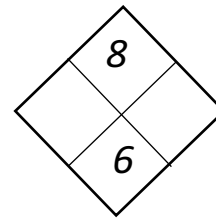
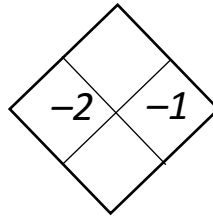
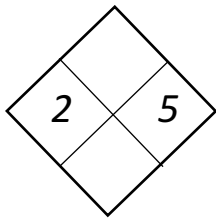
Here are 3 examples of Diamond Problems:



Notice that the left and right numbers help create the top and bottom numbers.



Attempt the following Diamond Problems



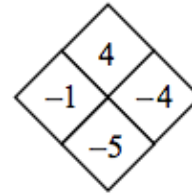
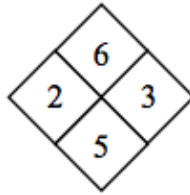
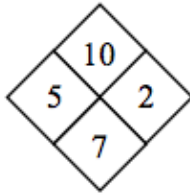
On the back of this paper, make your own Diamond Problems. Show how you might solve these.

Name: _____

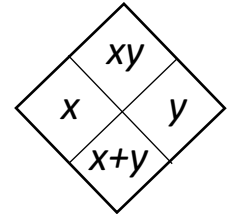
Period: _____

Algebra 2
Diamond Problem Intro

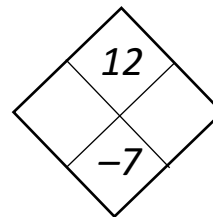
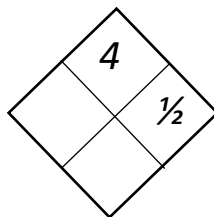
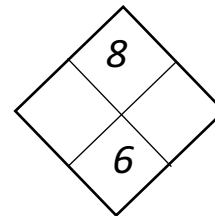
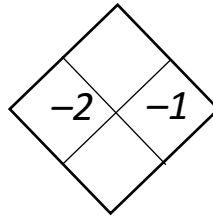
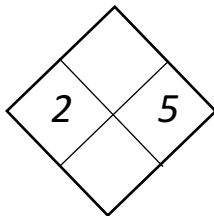
Here are 3 examples of Diamond Problems:



Notice that the left and right numbers help create the top and bottom numbers.



Attempt the following Diamond Problems



On the back of this paper, make your own Diamond Problems. Show how you might solve these.